


Position and Direction Challenge Cards



Position and Direction - Question 1

Move:

- Forwards 1.
- Turn right.
- Forwards 2.
- Turn right.
- Forwards 2.




Where will you finish?

Can you direct yourself from the castle to the shop?

Position and Direction - Question 2

Move:

- Forwards 1.
- Turn left.
- Forwards 2.
- Turn right.
- Forwards 1.




Where will you finish?

Can you direct yourself from the beach to the forest?

Position and Direction - Question 3

Move:

- Backwards 4.
- Turn left.
- Forwards 5.
- Turn right.
- Forwards 1.




Where will you finish?

Can you direct yourself from the bridge to the castle tower?

Position and Direction - Question 4

Move:

- Backwards 1
- Turn left.
- Forwards 2.
- Turn right.
- Forwards 2.
- Turn right.
- Forwards 1.




Where will you finish?

Can you direct yourself from the shop to the bridge?

Position and Direction - Question 5

Move Ricky Robot:

- Forwards 1.
- Turn right.
- Forwards 4.
- Backwards 2.
- Turn left.
- Forwards 1.




Where will you finish?

Can you direct yourself from the zoo to the tent?

Position and Direction - Question 6

Move:

- Turn left.
- Forwards 3.
- Turn right.
- Forwards 5.
- Turn left.
- Forwards 1.



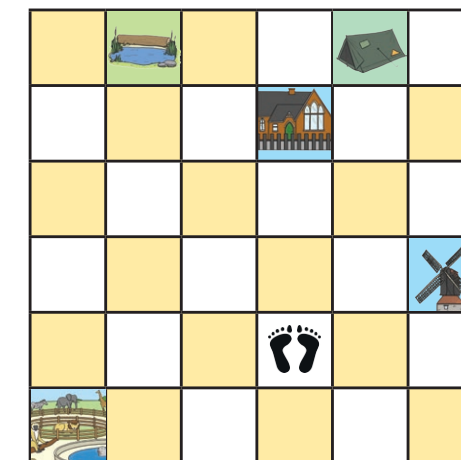
Where will you finish?

Can you direct yourself from the windmill to the school?

Position and Direction - Question 7

Move:

- Backwards 1.
- Turn left.
- Forwards 2.
- Turn right.
- Forwards 4.
- Turn right.
- Forwards 2.



Where will you finish?

Can you direct yourself from the pond to the zoo?


Position and Direction - Question 8

Move:

- Backwards 4.
- Turn right.
- Forwards 2.
- Turn left.
- Forwards 2.

Where will you finish?

Can you direct yourself from the tent to the zoo?



Position and Direction Answers

1. Forest
2. Bridge
3. Beach
4. Shop
5. Windmill
6. Pond
7. School
8. Tent