

# Main Task


Using the sheet on the next slide, recreate the different images using objects from your house or the online resource.

Work out the rows and write down the number sentence to match.

I will show you what to do!

## EXTRA

Create your own questions for working out rows for Miss Bullimore to have a go at!




There are \_\_\_\_ in each row.

There are \_\_\_\_ rows.

\_\_\_\_\_ = \_\_\_\_\_

There are \_\_\_\_ altogether.



There are \_\_\_\_ in each row.

There are \_\_\_\_ rows.

\_\_\_\_\_ = \_\_\_\_\_

There are \_\_\_\_ altogether.

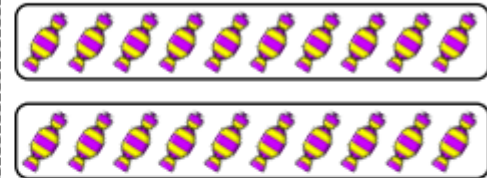


There are \_\_\_\_ in each row.

There are \_\_\_\_ rows.

\_\_\_\_\_ = \_\_\_\_\_

There are \_\_\_\_ altogether.

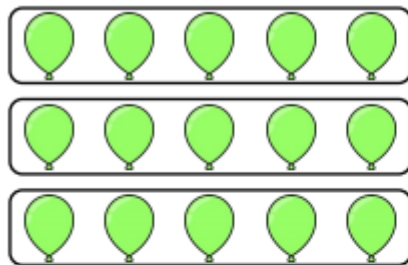


There are \_\_\_\_ in each row.

There are \_\_\_\_ rows.

\_\_\_\_\_ = \_\_\_\_\_

There are \_\_\_\_ altogether.

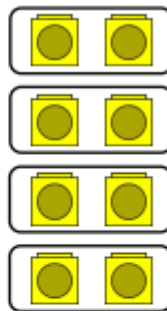


There are \_\_\_\_ in each row.

There are \_\_\_\_ rows.

\_\_\_\_\_ = \_\_\_\_\_

There are \_\_\_\_ altogether.

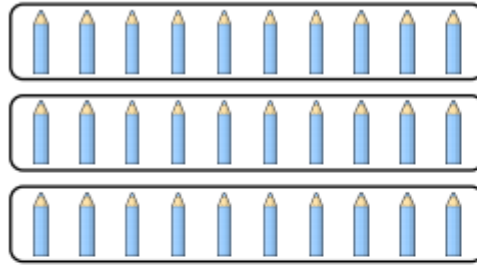


There are \_\_\_\_ in each row.

There are \_\_\_\_ rows.

\_\_\_\_\_ = \_\_\_\_\_

There are \_\_\_\_ altogether.




There are \_\_\_\_ in each row.

There are \_\_\_\_ rows.

\_\_\_\_\_ = \_\_\_\_\_

There are \_\_\_\_ altogether.



There are \_\_\_\_ in each row.

There are \_\_\_\_ rows.

\_\_\_\_\_ = \_\_\_\_\_

There are \_\_\_\_ altogether.